

Name _____



Comparing fractions



Fair Share

Color each shape to show the fraction.
Then compare the fractions.
Write >, <, or = in the circle.







A. 
 $\frac{1}{2}$  $\frac{2}{4}$



B. 
 $\frac{1}{3}$  $\frac{2}{6}$



C. 
 $\frac{2}{4}$  $\frac{1}{8}$

D. 
 $\frac{1}{3}$  $\frac{2}{6}$

E. 
 $\frac{1}{4}$  $\frac{4}{8}$

F. 
 $\frac{1}{6}$  $\frac{2}{12}$

G. 
 $\frac{1}{6}$  $\frac{1}{4}$

H. 
 $\frac{1}{3}$  $\frac{1}{4}$

Bonus Box: Divide each box into equal parts. Write a different fraction below each box. Shade the corresponding parts for each fraction. Write >, <, or = in the circle.

