









Name \_\_\_\_\_ Coin combinations

### Magnificent Money Pots

Count the money on each pot.  
Write the amount on the pot's opening.  
With a yellow crayon, color the pot in each  
pair that has the higher amount of money.



<b>A.</b> 	<b>B.</b> 
<b>C.</b> 	<b>D.</b> 
<b>E.</b> 	<b>F.</b> 
<b>G.</b> 	<b>H.</b> 



**Bonus Box:** On the back of this page, draw 3 different coin combinations that each equal 50¢.