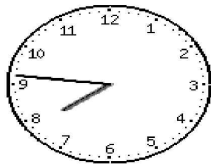


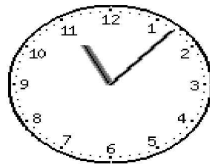
Clock Worksheet

Write the time to the nearest 5 minutes



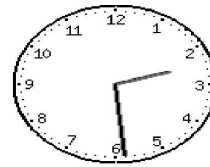
1a

___ : ___



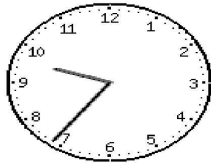
1b

___ : ___



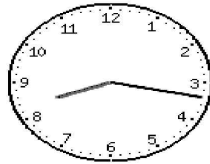
1c

___ : ___



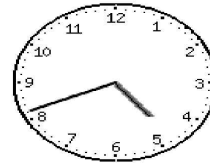
2a

___ : ___



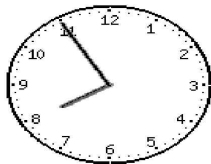
2b

___ : ___



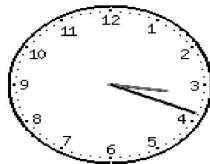
2c

___ : ___



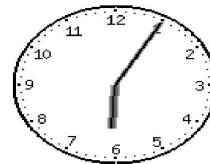
3a

___ : ___



3b

___ : ___



3c

___ : ___