




Name _____

Ways to make 10

Count the pips on each domino. Cut and paste number of pips to make a number sentence. Read each number sentence to your shoulder partner.

| |
|---|
|  |
| _____ + _____ = 10 |

| |
|--|
|  |
| _____ + _____ = 10 |

| |
|---|
|  |
| _____ + _____ = 10 |

5

1

5

4

9

6