





Name: \_\_\_\_\_



## French's Restaurant Pictograph

French's Restaurant opened in 2006. The pictograph below shows how many customers they have had each year since they opened.

Customers at French's Restaurant

Year	Number of Customers
2006	
2007	
2008	
2009	

 = 1,000 customers

1. What does each  symbol stand for? 1. \_\_\_\_\_
2. What does each  symbol stand for? 2. \_\_\_\_\_
3. How many customers did French's have in 2009? 3. \_\_\_\_\_
4. How many more customers did French's have in 2009 than in 2006? 4. \_\_\_\_\_
5. What is the first year French's had more than 2,000 customers? 5. \_\_\_\_\_
6. If the trend continues, make a prediction about the number of customers they will have in 2010. Explain your prediction.  
\_\_\_\_\_