
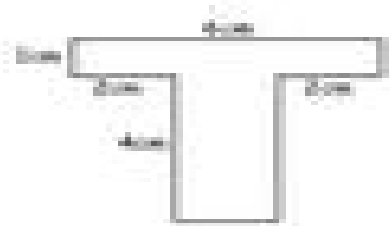


Name: _____ Subject: Year 6 Numeracy
 Date: _____ Unit: Perimeter

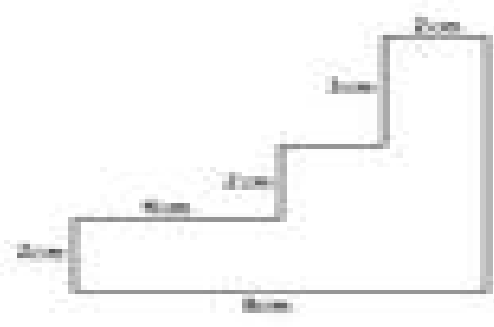
Work out the perimeter for the following shapes:



Perimeter _____



Perimeter _____



Perimeter _____