


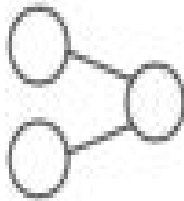
Name _____

PRACTICE


Color some cubes in a row red and some blue. Complete each number bond. Then write an addition sentence.



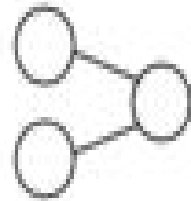
___ + ___ = ___



___ + ___ = ___




___ + ___ = ___




___ + ___ = ___



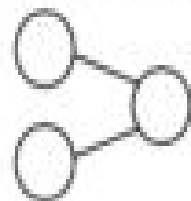
___ + ___ = ___



___ + ___ = ___



___ + ___ = ___



___ + ___ = ___