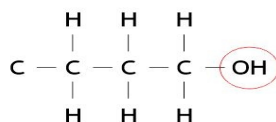
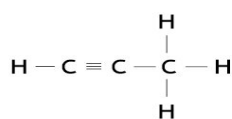
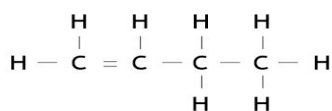
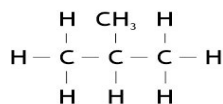
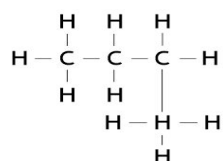


Name _____

Date _____

NAMING HYDROCARBON

Name the compounds below according to the IUPAC naming system.

**alcohol****1-propyne****2-pentene****2-methylpropane****butane**