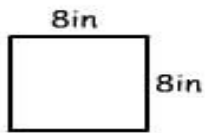


Print

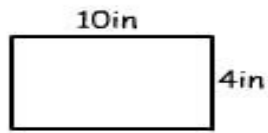
## Perimeter

Name: \_\_\_\_\_

Calculate the perimeter of these shapes:



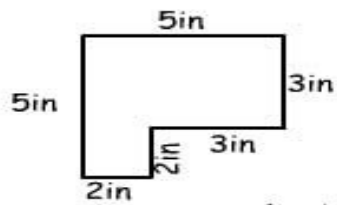
perimeter = \_\_\_ in



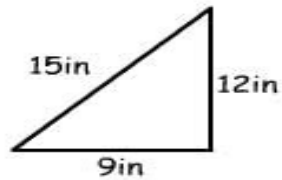
perimeter = \_\_\_ in



perimeter = \_\_\_ in



perimeter = \_\_\_ in



perimeter = \_\_\_ in

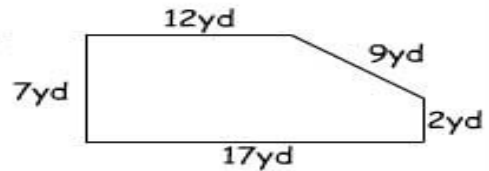
---

### Working Mathematically

- 1) Henry the ant walked around this shape twice.  
How far did he walk? \_\_\_\_\_



- 2) How many yards of fencing does Sally need for her paddock? \_\_\_\_\_



- 3) What is the perimeter of a square with 12in sides? \_\_\_\_\_