
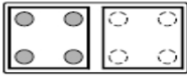
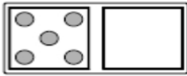
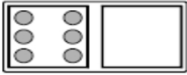
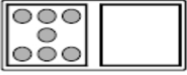
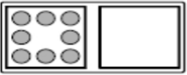
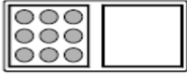


Name: _____

Domino Double Facts to 18

<p>Find 3 + 3. Draw 3 more dots to show the double. Then write the addition sentence.</p>	 $3 + 3 = 6$
---	---

Directions: Draw dots on the domino to show the double. Then write the addition sentence.

 $4 + 4 = 8$	 $5 + \underline{\quad} = \underline{\quad}$
 $\underline{\quad} + \underline{\quad} = \underline{\quad}$	 $\underline{\quad} + \underline{\quad} = \underline{\quad}$
 $\underline{\quad} + \underline{\quad} = \underline{\quad}$	 $\underline{\quad} + \underline{\quad} = \underline{\quad}$