



Name _____ Date _____


Subtract the number of objects in the circle.




$$8 - 3 =$$



$$8 - 6 =$$



$$8 - 4 =$$



$$8 - 2 =$$



© abcteach.com