


## Coloring Fractions

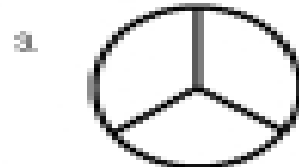
**Directions:** Color the correct part of each shape to match the fraction. The first one has been done for you.




$$\frac{1}{4}$$



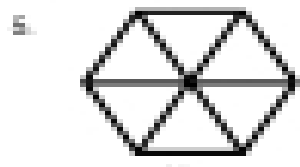
$$\frac{2}{4}$$




$$\frac{1}{3}$$



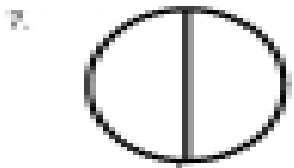
$$\frac{5}{5}$$



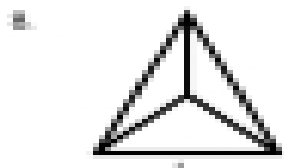
$$\frac{4}{6}$$



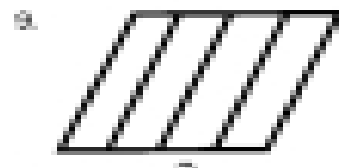
$$\frac{2}{3}$$



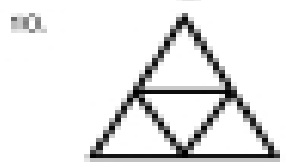
$$\frac{1}{2}$$



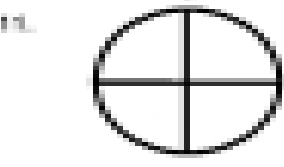
$$\frac{1}{3}$$




$$\frac{3}{4}$$



$$\frac{4}{4}$$



$$\frac{2}{4}$$



$$\frac{1}{4}$$