





Habitats





Name: _____

Write these food chains in the correct order. Then write the name of one producer, one primary and one predator in each food chain.





1

			
Wheat	Sun	Mouse	Owl
_____ → _____ → _____			
Producer	Prey	Predator	

2

			
Zebra	Lion	Sun	Grass
_____ → _____ → _____			
Producer	Prey	Predator	

3

			
Dolphin	Seaweed	Eel	Sun
_____ → _____ → _____			
Producer	Prey	Predator	