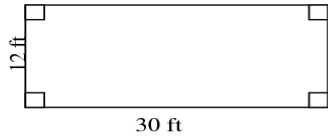


Name \_\_\_\_\_ Period \_\_\_\_\_ Date \_\_\_\_\_

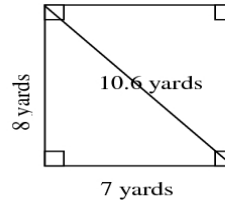
**Perimeter and Circumference**

For all of the problems, find the perimeter.

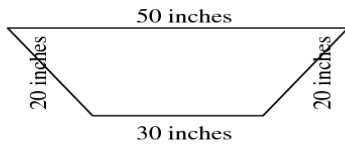
1) Perimeter = \_\_\_\_\_




2) Perimeter = \_\_\_\_\_



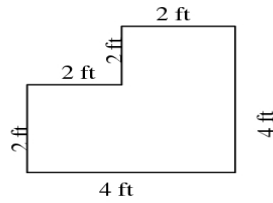
3) Perimeter = \_\_\_\_\_



4) Perimeter = \_\_\_\_\_



5) Perimeter = \_\_\_\_\_



6) Perimeter = \_\_\_\_\_

