

## Reading Analog Clocks (A)


Read each time and write it in the space under the clock.

1.




\_\_\_\_\_

2.




\_\_\_\_\_

3.




\_\_\_\_\_

4.



\_\_\_\_\_

5.




\_\_\_\_\_

6.




\_\_\_\_\_

7.




\_\_\_\_\_

8.



\_\_\_\_\_

9.



\_\_\_\_\_

10.




\_\_\_\_\_

11.



\_\_\_\_\_

12.



\_\_\_\_\_