


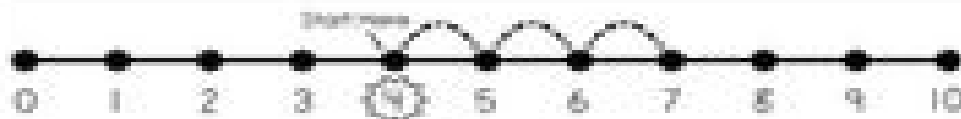
Name: \_\_\_\_\_ Date: \_\_\_\_\_

## NUMBER LINE ADDITION


Directions: Use the number line to help solve.



$$5 + 2 = \square$$



$$3 + 4 = \square$$



$$2 + 7 = \square$$