
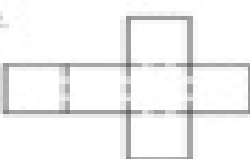


Next in Line


Look at each pattern. Think about the shape that it would form when put together. Then write the name of the shape and its number of faces, number of edges, and number of vertices in the spaces provided.

1.  faces _____
edges _____
vertices _____


Name _____


2.  faces _____
edges _____
vertices _____

Name _____


3.  faces _____
edges _____
vertices _____

Name _____




4.  faces _____
edges _____
vertices _____

Name _____

5.  faces _____
edges _____
vertices _____

Name _____

6.  faces _____
edges _____
vertices _____

Name _____