

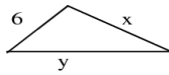
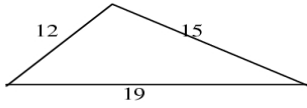
Shadows - Day 9

Assume that each pair of figures below is similar and that they are facing the same way.

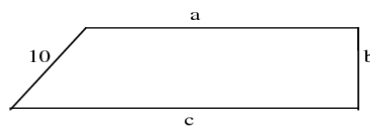
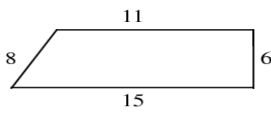
Set up and solve the proportions needed to find the measure of the sides labeled by variables.

---

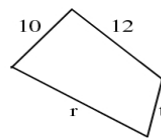
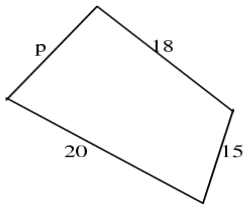
1.



2.



3.



4.

