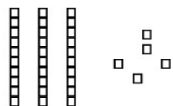


Name \_\_\_\_\_

CCSS 2.NBT.1 Understand place value


Place Value

Directions: Write how many tens and ones. Then write the number.



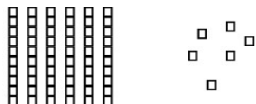
\_\_\_ tens \_\_\_ ones

\_\_\_ + \_\_\_ = \_\_\_



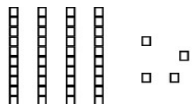
\_\_\_ tens \_\_\_ ones

\_\_\_ + \_\_\_ = \_\_\_




\_\_\_ tens \_\_\_ ones

\_\_\_ + \_\_\_ = \_\_\_



\_\_\_ tens \_\_\_ ones

\_\_\_ + \_\_\_ = \_\_\_



\_\_\_ tens \_\_\_ ones

\_\_\_ + \_\_\_ = \_\_\_



\_\_\_ tens \_\_\_ ones

\_\_\_ + \_\_\_ = \_\_\_