


Name: _____


Date: _____

Pre-Assessment


Look at the shapes. Circle the correct fraction.




$\frac{1}{2}$ $\frac{1}{3}$ $\frac{1}{4}$




$\frac{1}{2}$ $\frac{2}{4}$ $\frac{1}{4}$




$\frac{1}{2}$ $\frac{3}{4}$ $\frac{3}{5}$



$\frac{1}{2}$ $\frac{1}{4}$ $\frac{1}{5}$



$\frac{1}{2}$ $\frac{1}{4}$ $\frac{1}{5}$



$\frac{1}{2}$ $\frac{2}{4}$ $\frac{2}{3}$