


Multiplication Rows and Columns

Name: _____ Class: _____

Write the multiplication sentences for the rows and columns.



_____ × _____ = _____
_____ × _____ = _____



_____ × _____ = _____
_____ × _____ = _____



_____ × _____ = _____
_____ × _____ = _____



_____ × _____ = _____
_____ × _____ = _____



_____ × _____ = _____
_____ × _____ = _____




_____ × _____ = _____
_____ × _____ = _____




_____ × _____ = _____
_____ × _____ = _____



_____ × _____ = _____
_____ × _____ = _____



_____ × _____ = _____
_____ × _____ = _____



_____ × _____ = _____
_____ × _____ = _____



_____ × _____ = _____
_____ × _____ = _____



_____ × _____ = _____
_____ × _____ = _____