


Name: \_\_\_\_\_

CCSS 2.MD.2 Measure the length of an object twice, using length units of different lengths...

## Measurement

 Directions: Cut out the ladybug and pencil rulers at the bottom of the page and measure the boxes below. Record your results.

1. \_\_\_\_\_ ladybugs long                      \_\_\_\_\_ pencils long



2. \_\_\_\_\_ ladybugs long                      \_\_\_\_\_ pencils long





3. \_\_\_\_\_ ladybugs long                      \_\_\_\_\_ pencils long



4. Why did you get different results when you measured the same box with both rulers?

\_\_\_\_\_

\_\_\_\_\_



Graphics/fonts copyright DJ Inkers. www.djinkers.com