

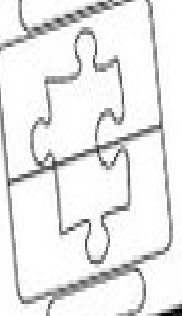
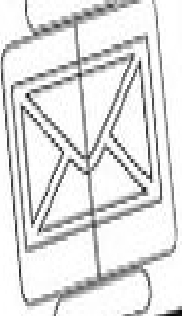
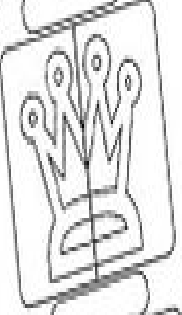
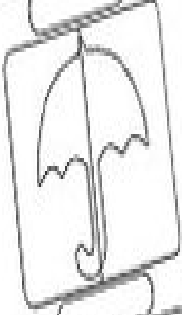
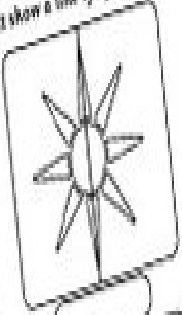
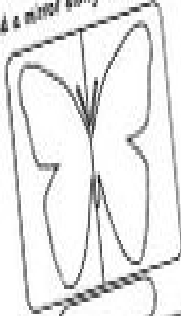


Line of Symmetry

Name: _____

Date: _____

Hold a mirror along the line. Does it show a line of symmetry?



www.twinkl.co.uk

Copyright © 2012 twinkl

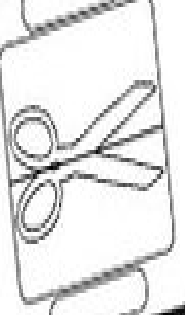
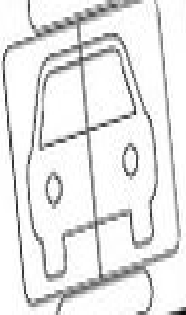
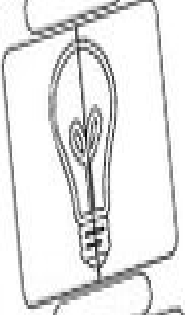
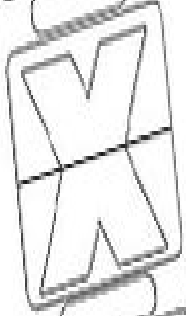




Line of Symmetry

Name: _____

Date: _____

Hold a mirror along the line. Does it show a line of symmetry?



www.twinkl.co.uk

Copyright © 2012 twinkl