

Name: _____

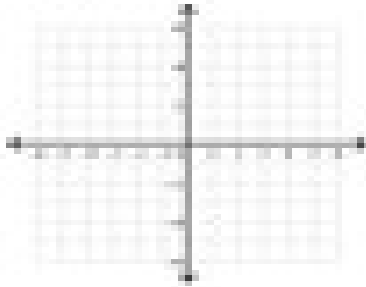
Class: _____ Period: _____

Math 1.1: Solving Systems of Linear Equations I

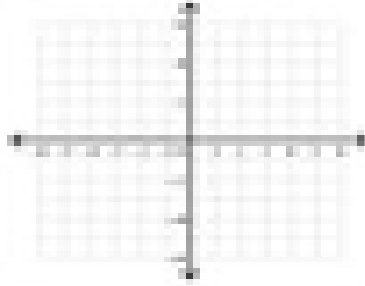
Graphing Lines

Sketch the graph of each line.

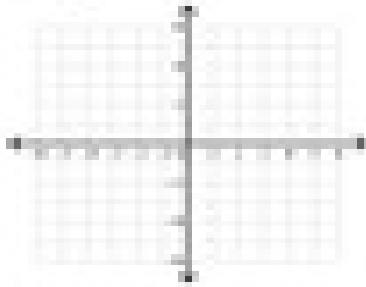
1a. $y = \frac{1}{2}x + 2$



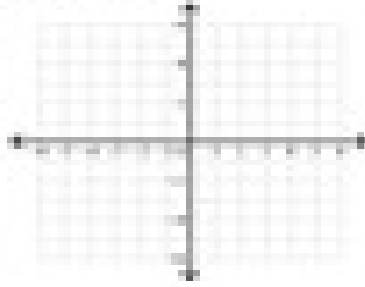
1b. $y = \frac{1}{2}x + 1$



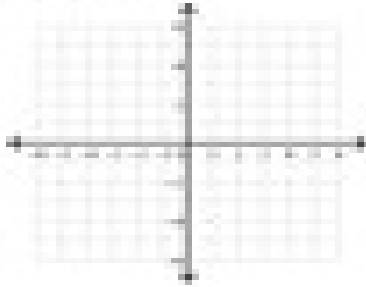
2a. $y = -\frac{2}{3}x$



2b. $y = \frac{1}{2}x + 3$



3a. $y = -2x + 2$



3b. $y = -\frac{1}{2}x + 1$

