

Name _____

Date _____

Circumference of Circles

Find the circumference for each circle. Round to the nearest hundredth.

$$\text{Circumference} = 2 \pi r$$

$$\text{Assume } \pi = 3.14$$

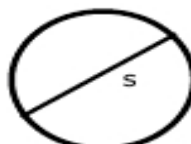
1.



$$J = 35 \text{ yd}$$

Area = _____

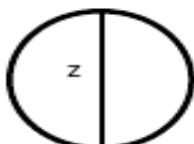
2.



$$s = 93 \text{ m}$$

Area = _____

3.



$$z = 8 \text{ ft}$$

Area = _____

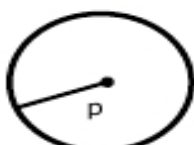
4.



$$f = 62 \text{ mi}$$

Area = _____

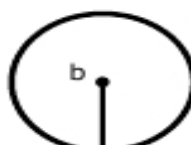
5.



$$p = 91 \text{ yd}$$

Area = _____

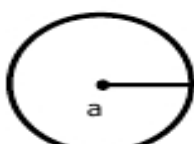
6.



$$b = 71 \text{ yd}$$

Area = _____

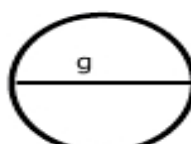
7.



$$a = 22 \text{ ft}$$

Area = _____

8.



$$g = 40 \text{ in}$$

Area = _____