

# Answer Key!

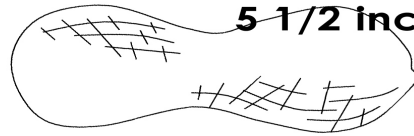
Name \_\_\_\_\_

## HOW LONG IS IT?


Use the rulers to measure each object to the nearest 1/4 inch. Mark your answer on the ruler and write it next to the object. Good luck!




**2 1/2 inches**



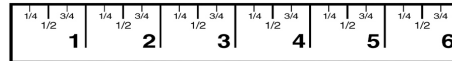
**5 1/2 inches**



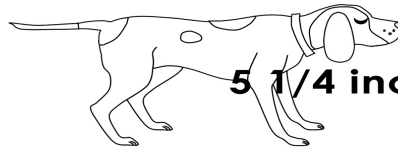
**4 1/4 inches**




**3 inches**



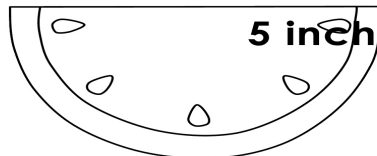
**5 3/4 inches**



**5 1/4 inches**



**3 3/4 inches**



**5 inches**

