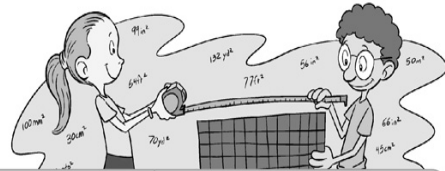







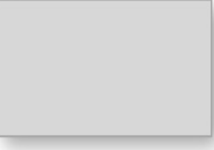


Name \_\_\_\_\_ Date   /  /  

## AREA OF A RECTANGLE PRACTICE

Directions: Find the area and the perimeter of the figures below.



<p>①</p>  <p>Perimeter = _____ units Area = _____ square units</p>	<p>②</p>  <p>Perimeter = _____ units Area = _____ square units</p>	<p>③</p>  <p>Perimeter = _____ units Area = _____ square units</p>	<p>④</p>  <p>Perimeter = _____ units Area = _____ square units</p>
<p>⑤</p>  <p>Perimeter = _____ units Area = _____ square units</p>	<p>⑥</p>  <p>Perimeter = _____ units Area = _____ square units</p>	<p>⑦</p>  <p>Perimeter = _____ units Area = _____ square units</p>	<p>⑧</p>  <p>Perimeter = _____ units Area = _____ square units</p>