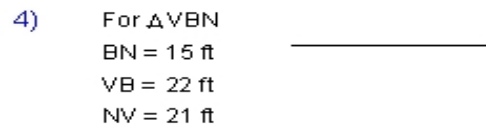
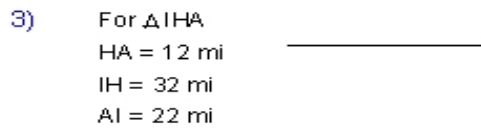
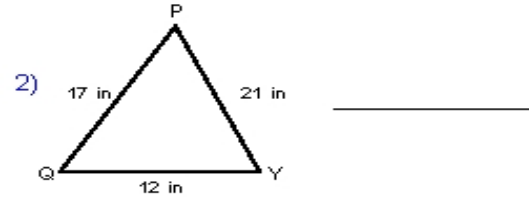
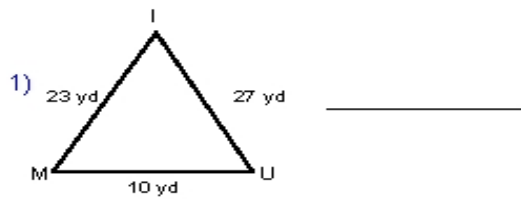


Name : \_\_\_\_\_ Score : \_\_\_\_\_  
 Teacher : \_\_\_\_\_ Date : \_\_\_\_\_

### Triangle Inequality of Angles

Order each triangle's angles from largest to smallest.



Name the largest and smallest angle for each triangle.

