




Name: _____

Can you tell the time to the nearest 5 minutes?
Worksheet 10

1



10:04

2



3




4




5



6



7




8




9



10



11



12

