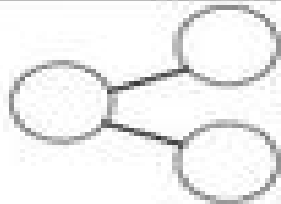


Name: _____

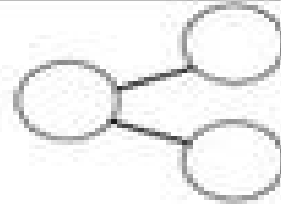
Date: _____

Use the number bonds to help you solve the problems.

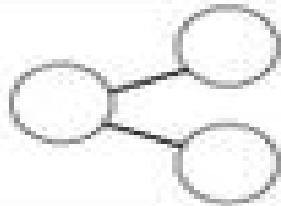
$--- + 3 = 9$



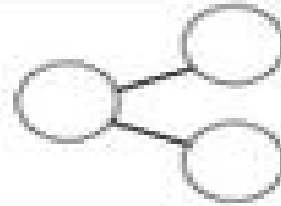
$--- + 1 = 5$



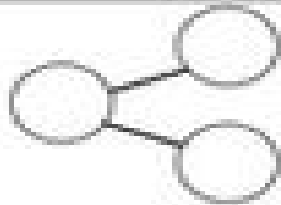
$--- + 2 = 8$



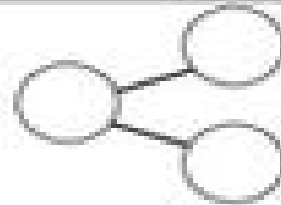
$4 + --- = 10$



$6 + --- = 8$



$7 + --- = 10$



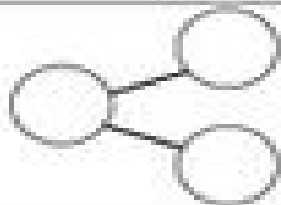
$--- + 2 = 7$



$9 + --- = 10$



$--- + 5 = 10$



$2 + --- = 5$

