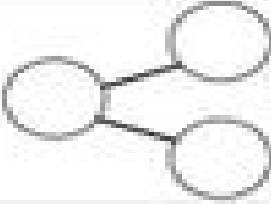
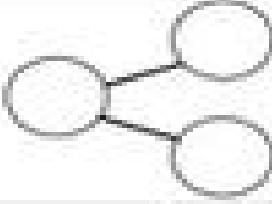
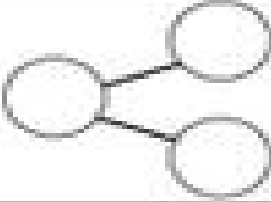
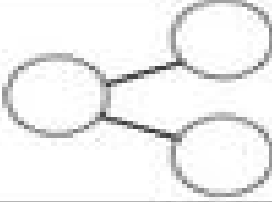

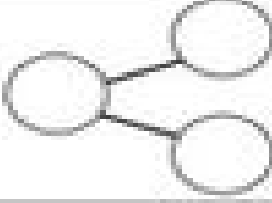
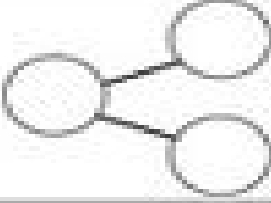
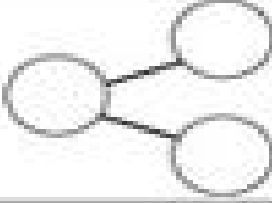
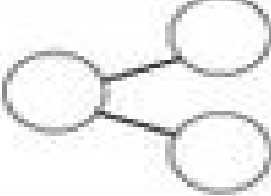


Name: \_\_\_\_\_

Date: \_\_\_\_\_

Use the number bonds to help you solve the problems.

$\_\_\_ + 3 = 9$		$\_\_\_ + 1 = 5$	
$\_\_\_ + 2 = 8$		$4 + \_\_\_ = 10$	
$6 + \_\_\_ = 8$		$7 + \_\_\_ = 10$	
$\_\_\_ + 2 = 7$		$9 + \_\_\_ = 10$	
$\_\_\_ + 5 = 10$		$2 + \_\_\_ = 5$	