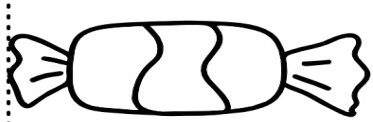


Name _____ Date _____

IDENTIFY LENGTH


USING TILES

Count the number of tiles to find the length of the objects and fill in the blanks!



--	--	--	--	--	--	--	--	--	--

The candy is _____ tiles long.




--	--	--	--	--	--	--	--	--	--

The pencil is _____ tiles long.



--	--	--	--	--	--	--	--	--	--

The paper clip is _____ tiles long.



--	--	--	--	--	--	--	--	--	--

The feather is _____ tiles long.