

Name : _____

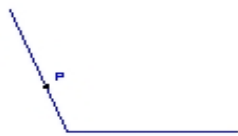
Score : _____

Teacher : _____

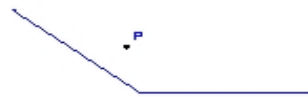
Date : _____

State if the given point is interior, exterior or on the angle.

1)



2)



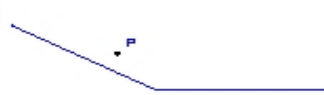
3)



4)



5)



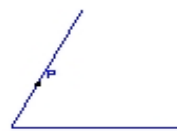
6)



7)



8)



9)

