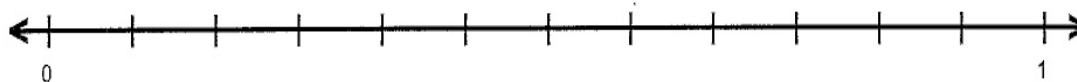


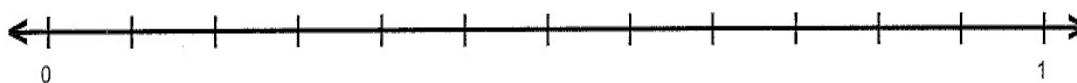
Name : _____ Score : _____

Teacher : _____ Date : _____

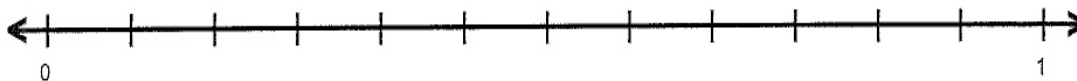
Fractions on Number Lines



A = $\frac{11}{12}$ B = $\frac{1}{4}$ C = $\frac{5}{12}$ D = $\frac{7}{12}$



A = $\frac{11}{12}$ B = $\frac{1}{4}$ C = $\frac{1}{3}$ D = $\frac{5}{12}$



A = $\frac{5}{6}$ B = $\frac{1}{2}$ C = $\frac{1}{6}$ D = $\frac{1}{4}$