













That's A Fact

Directions: Solve the multiplication and division equations in each house. Do you notice a pattern?

 <p style="font-size: 1.2em; font-weight: bold;">36</p> <p>8 x ____ = 36 ____ x 4 = 36 36 ÷ 4 = ____ ____ ÷ 8 = 4</p>	 <p style="font-size: 1.2em; font-weight: bold;">45</p> <p>9 x ____ = 45 ____ x 5 = 45 45 ÷ 5 = ____ ____ ÷ 9 = 5</p>	 <p style="font-size: 1.2em; font-weight: bold;">72</p> <p>8 x ____ = 72 ____ x 9 = 72 72 ÷ 8 = ____ 72 ÷ 9 = ____</p>
 <p style="font-size: 1.2em; font-weight: bold;">48</p> <p>6 x ____ = 48 ____ x 8 = 48 48 ÷ 8 = ____ ____ ÷ 6 = 6</p>	 <p style="font-size: 1.2em; font-weight: bold;">30</p> <p>5 x ____ = 30 ____ x 6 = 30 30 ÷ 6 = ____ ____ ÷ 5 = 6</p>	 <p style="font-size: 1.2em; font-weight: bold;">40</p> <p>5 x ____ = 40 ____ x 5 = 40 40 ÷ 5 = ____ 40 ÷ 8 = ____</p>
 <p style="font-size: 1.2em; font-weight: bold;">54</p> <p>6 x ____ = 54 ____ x 9 = 54 54 ÷ 9 = ____ ____ ÷ 6 = 9</p>	 <p style="font-size: 1.2em; font-weight: bold;">63</p> <p>9 x ____ = 63 ____ x 7 = 63 63 ÷ 7 = ____ ____ ÷ 9 = 7</p>	 <p style="font-size: 1.2em; font-weight: bold;">42</p> <p>7 x ____ = 42 ____ x 6 = 42 42 ÷ 6 = ____ ____ ÷ 7 = 6</p>
 <p style="font-size: 1.2em; font-weight: bold;">56</p> <p>8 x ____ = 56 ____ x 8 = 56 56 ÷ 8 = ____ ____ ÷ 7 = 8</p>	 <p style="font-size: 1.2em; font-weight: bold;">28</p> <p>7 x ____ = 28 ____ x 4 = 28 28 ÷ 4 = ____ 28 ÷ 7 = ____</p>	 <p style="font-size: 1.2em; font-weight: bold;">60</p> <p>6 x ____ = 60 ____ x 6 = 60 60 ÷ 6 = ____ ____ ÷ 10 = 6</p>