

Name: \_\_\_\_\_

CCSS 2.OA.3 Determine whether a group of objects (up to 20) has an odd or even number of members...

## Even or Odd?

**Directions:** Complete and solve the problems.

An even number can be divided into two equal parts. An odd number cannot be divided into two equal parts. An even number can be expressed with a doubles addition fact. Shade in the squares top, bottom, top, bottom to illustrate the number shown.

Examples:


Is 14 an even number?     yes    no



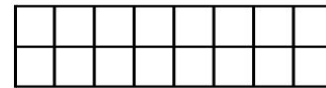
Is 9 an even number?    yes     no



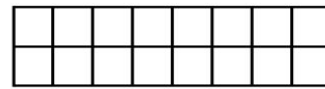
Is 13 an even number?    yes    no



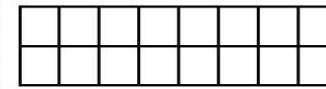
Is 8 an even number?    yes    no



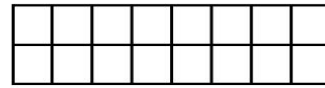
Is 5 an even number?    yes    no



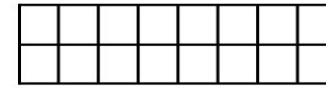
Is 16 an even number?    yes    no



Is 12 an even number?    yes    no



Is 7 an even number?    yes    no



\_\_\_\_ I double checked my work.