

Pencil and Paper Task

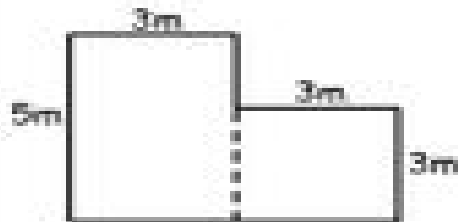
Name: _____

Area



Print

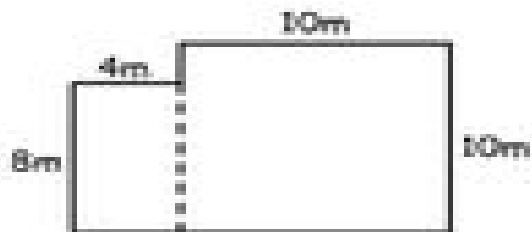
Calculate the total area of these irregular shapes.



A 1 = _____ x _____

A 2 = _____ x _____

Total Area = _____

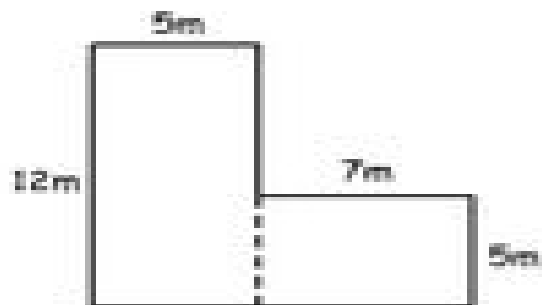


A 1 = _____ x _____

A 2 = _____ x _____

Total Area = _____

How many square metres of carpet are laid in this house?



A 1 = _____ x _____

A 2 = _____ x _____

Total Area = _____