




Name: _____

Add One More

Count how many frogs you see on the left of the plus sign, then add one more. How many do you have now?



 $1 + 1 = \square$

$3 + 1 = \square$

$2 + 1 = \square$

$4 + 1 = \square$