




Name: \_\_\_\_\_


## Angles


Directions: Measure each angle using a protractor. Write the angle's measurement. Label the angles as acute, obtuse, right, or straight.


1.  \_\_\_\_\_  
\_\_\_\_\_


2.  \_\_\_\_\_  
\_\_\_\_\_


3.  \_\_\_\_\_  
\_\_\_\_\_

4.  \_\_\_\_\_  
\_\_\_\_\_

5.  \_\_\_\_\_  
\_\_\_\_\_

6.  \_\_\_\_\_  
\_\_\_\_\_

7.  \_\_\_\_\_  
\_\_\_\_\_

8.  \_\_\_\_\_  
\_\_\_\_\_

9.  \_\_\_\_\_  
\_\_\_\_\_

10.  \_\_\_\_\_  
\_\_\_\_\_