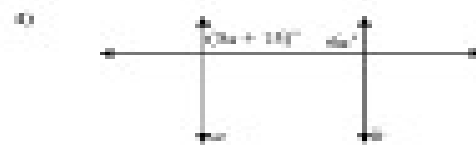
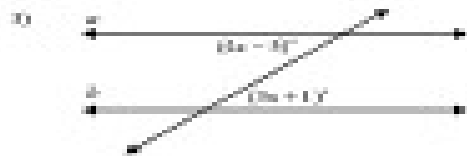
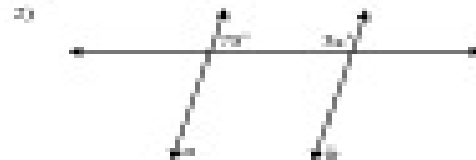


Find the value of x that makes $a \parallel b$.



5) Find the values of x and y that makes $\overline{AB} \parallel \overline{CD}$ and $\overline{AD} \parallel \overline{BC}$.

