

Name _____

Presidents' Day
Reading a graph

Presidential Hats



George Washington


	I
	IIII







Abraham Lincoln

Color the graph to match the tally marks.

George's and Abe's Hats



Use the graph to answer the questions.

1. How many  are there? _____
2. How many  are there? _____
3. How many hats are there in all? _____
4. How many more  than  are there? _____