

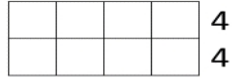
Name _____

Date _____



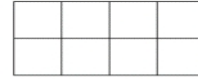
UNDERSTANDING MULTIPLICATION (ARRAYS) 4

Example:



4 squares in each row.

$$4 \times 2 = 8$$




2 2 2 2

2 squares in each column.

$$2 \times 4 = 8$$

Change these arrays into multiplication sentences.

1)



$$3 \times 2 = \underline{\quad}$$

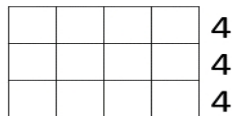
2)



2 2 2

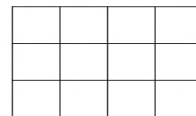
$$2 \times 3 = \underline{\quad}$$

3)



$$\underline{\quad} \times \underline{\quad} = \underline{\quad}$$

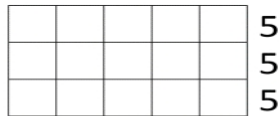
4)



3 3 3 3

$$\underline{\quad} \times \underline{\quad} = \underline{\quad}$$

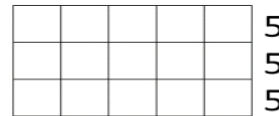
5)



3 3 3 3 3

$$\underline{\quad} \times \underline{\quad} = \underline{\quad}$$

6)



3 3 3 3 3

$$\underline{\quad} \times \underline{\quad} = \underline{\quad}$$



2ND GRADE

MATH-SALAMANDERS.COM