


Name: _____

Identify Equal Parts

Directions: Identify the shapes that are split into equal parts.


1.



equal

not equal


2.



equal

not equal


3.



equal

not equal


4.



equal

not equal

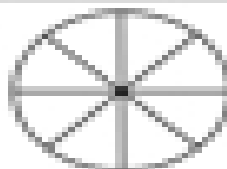
5.



equal

not equal


6.



equal

not equal


7.



equal

not equal

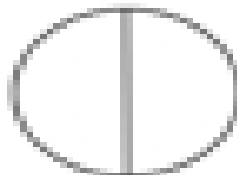
8.



equal

not equal

9.



equal

not equal

10.



equal

not equal