


Name: _____

Identify Equal Parts

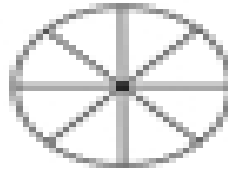
Directions: Identify the shapes that are split into equal parts.

1.




equal
not equal

6.



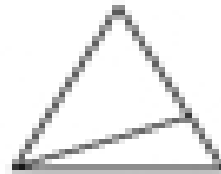
equal
not equal

2.



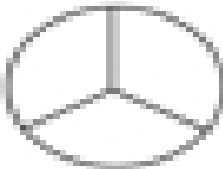
equal
not equal

7.




equal
not equal

3.




equal
not equal

8.



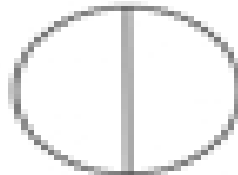
equal
not equal

4.




equal
not equal

9.




equal
not equal

5.



equal
not equal

10.



equal
not equal