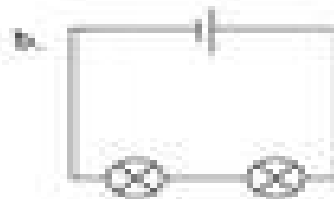




Score	
	3
06-03-07-009-a	

Name: _____ Subject: Year 5 Science
 Date: _____ Unit: Eg. Changing circuits


Look at the circuits below and answer the questions:



Which diagram would produce the brightest bulb? _____



Which bulb in this circuit would light up? _____
 Why would the other bulb not light up?



What would happen to the bulb in this circuit?

