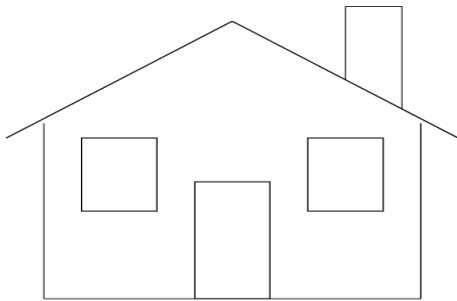


1. Kevin drew a diagonal inside a quadrilateral and made 2 equilateral triangles. What kind of quadrilateral did Kevin use to draw the triangles?

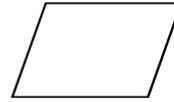
A pentagon
B rectangle
C rhombus
D trapezoid

2. This picture is made **mostly** of which of the following?




A acute angles and intersecting line segments
B obtuse angles and diagonal line segments
C right angles and straight line segments
D right angles and circles

3. Which statement correctly compares this parallelogram and this rectangle?



Parallelogram



Rectangle

- A Both figures are polygons with four right angles.
B Both figures are polygons with pairs of parallel opposite sides.
C Both figures are polygons whose interior angles total 180 degrees.
D Both figures are polygons with at least two acute angles.