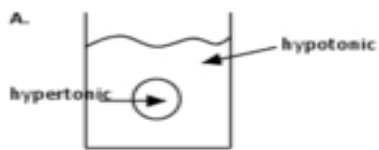


Name _____ per _____ Date _____

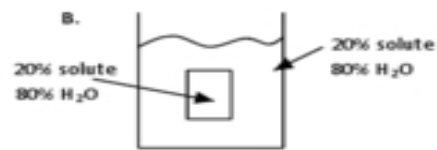
Osmosis Practice

1. Which direction does water move?
Choices: into the cell, out of the cell, in and out equally
2. What happens to the cell?
Choices: bursts, crenates, normal/unchanged, plasmolyzes, becomes turgid

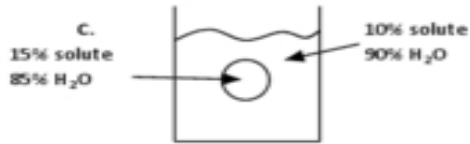
○ = _____ cell □ = _____ cell



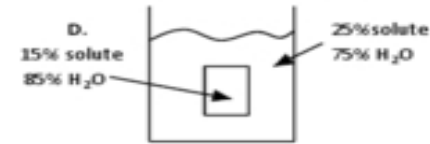
1. _____
2. _____



1. _____
2. _____



1. _____
2. _____



1. _____
2. _____



1. _____
2. _____



1. _____
2. _____