

Name : _____

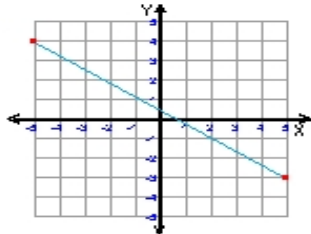
Score : _____

Teacher : _____

Date : _____

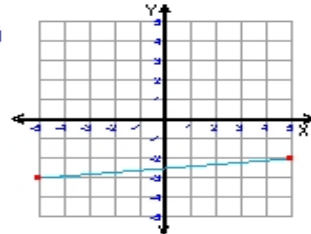
What is the slope of each line ?

1)



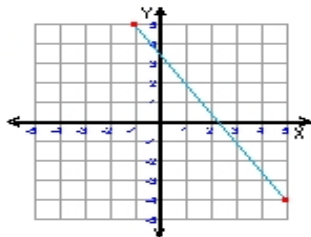
Slope = _____

2)



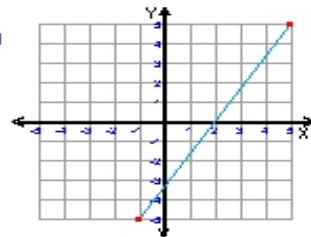
Slope = _____

3)



Slope = _____

4)



Slope = _____

5) $y = \frac{1}{2}x - 3$

Slope = _____

6) $y = -\frac{2}{7}x + 1$

Slope = _____

7) $y = 10x + 2$

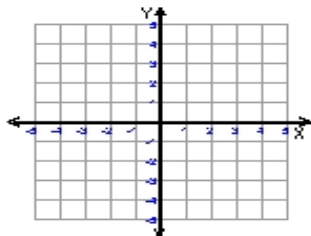
Slope = _____

8) $y = -3x$

Slope = _____

Write the slope-intercept form and plot the equation of each line given the slope and y-intercept.

9)

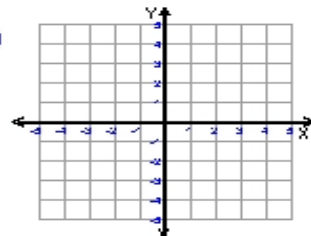


Slope = $\frac{1}{7}$

y-intercept = -2

Equation : _____

10)



Slope = $-\frac{3}{4}$

y-intercept = -3

Equation : _____