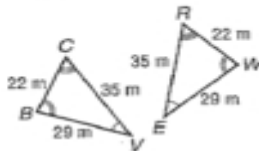


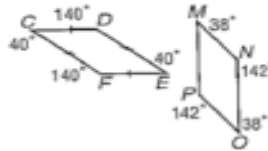
6-5**Practice: Skills****Congruent Polygons**

Determine whether the polygons shown are congruent. If so, name the corresponding parts and write a congruence statement.

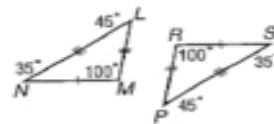
1.



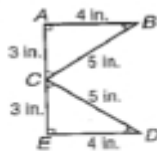
2.



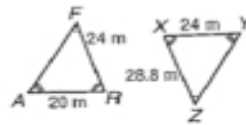
3.



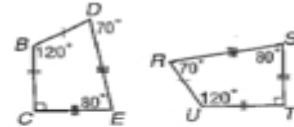
4.



5.



6.



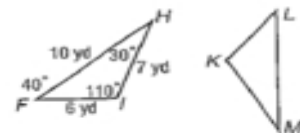
In the figure, $\triangle HFI \cong \triangle MLK$. Find each measure.

7. $m\angle M$

8. ML

9. $m\angle K$

10. KM



In the figure, quadrilateral $ACDB \cong$ quadrilateral $EFGH$. Find each measure.

11. $m\angle H$

12. EF

13. $m\angle F$

14. HG

