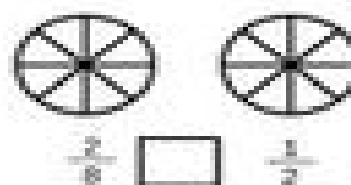
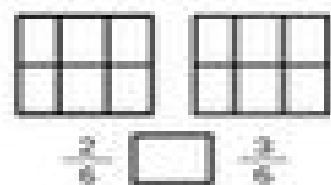
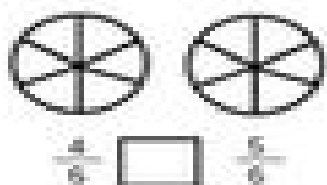

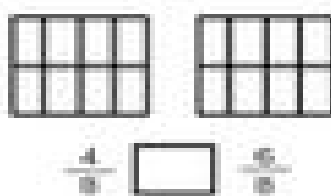
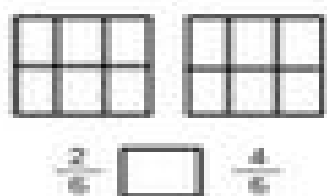
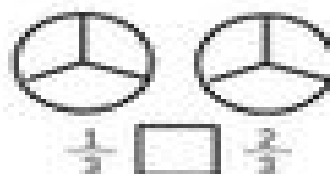
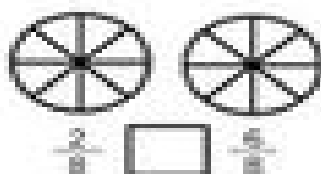
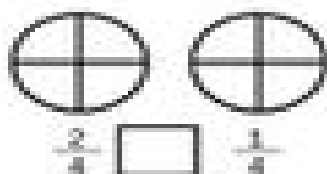


Time \_\_\_\_\_

# \_\_\_\_\_

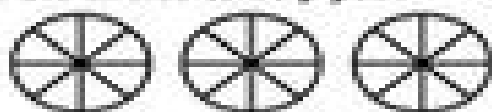
Date \_\_\_\_\_

Shade in the fraction shown, then write use  $>$ ,  $<$ , or  $=$  to compare the two fractions.



Put these fractions in order:  $\frac{4}{6}$   $\frac{2}{6}$   $\frac{7}{6}$

Use the circles to help you!



\_\_\_\_\_